

Read and Write Numbers Place Value

1. How many numbers can you make using 5 tens and some ones?

Can you write the numeral?

Can you write the number in words?

Do you think you will be able to write more or less numbers using 8 tens and some ones?

Give a reason for your opinion.



twinkl.com

Read and Write Numbers Place Value

2. How many numbers between 1 and 100 would have the word

'one'

in them?

Can you write them all down? How will you know you have found them all?


How many numerals have the digit one in them? Is it the same number as before? Can you explain what you notice?

twinkl.com

Read and Write Numbers Place Value

3. How many numbers between 1 and 20 have 3 letters in them, when written as a word?

How many have 5 letters?



twinkl.com

Read and Write Numbers Place Value

4. Which 2-digit number with the same number of tens and ones is the longest when it is written as a word?

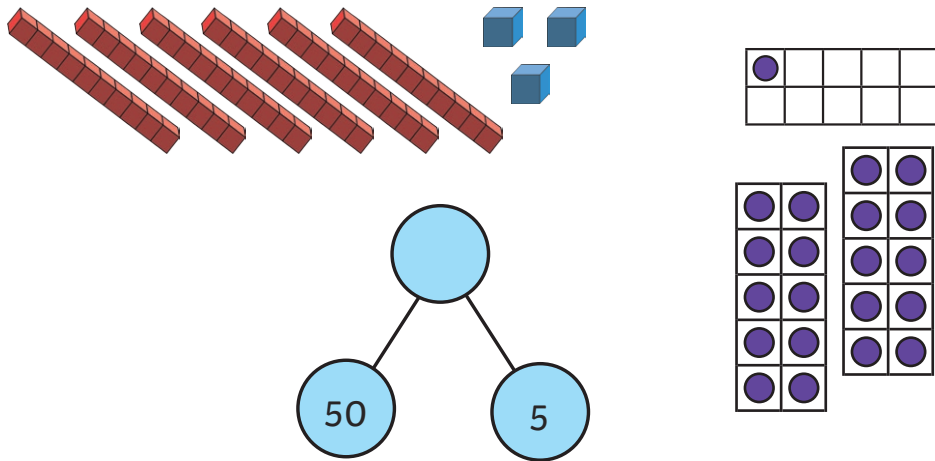
Which is the shortest?



twinkl.com

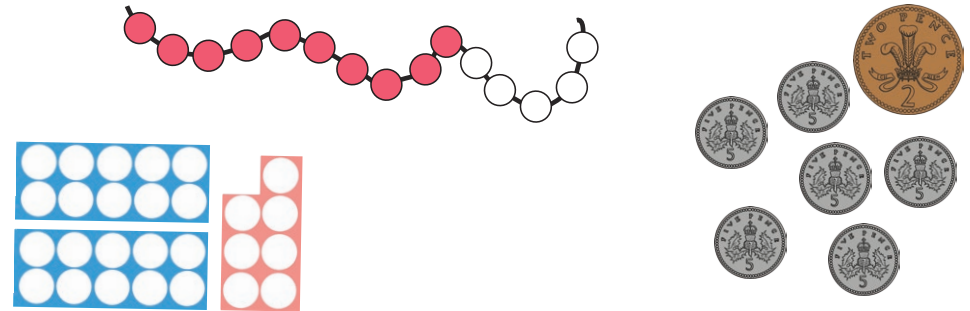
Read and Write Numbers Place Value

5. Write the following numbers in numerals and words.



Read and Write Numbers Place Value

6. Write one more and one less than these numbers, in numerals and words.



Look at each of your pairs of answers - what do you notice? Can you explain why this happens?

Read and Write Numbers Place Value

7. Abi says that when she gets to 100, she can just start counting from 1 again.

Is Abi right?

Give a reason for your answer.




Read and Write Numbers Place Value

8. Ben has noticed that 100 has two 0s. He says that all the numbers over 100 will also have two 0s. Is Ben right? Give a reason for your answer.



Read and Write Numbers Place Value

9. Write the following numbers in numerals and words.



twinkl.com

Read and Write Numbers Place Value

10. Write the following numbers in numerals.

ninety-six

twenty-nine

fifty

Can you order them from largest to smallest?

Can you write the numeral which is 1 more and 1 less than each number?

Can you write the numeral which is 10 more and 10 less than each number?

twinkl.com